

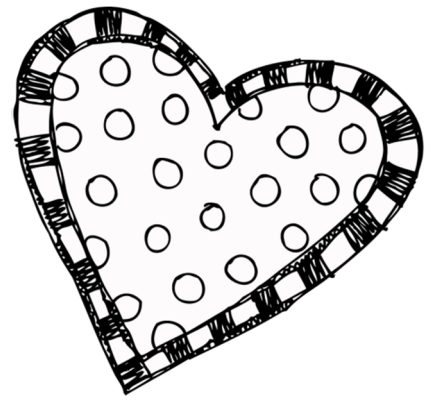
Name _____

Look at each card and count the money. Write how much next to the correct number.

1.	
2.	
3.	
4.	
5.	
6.	
7.	
8.	
9.	
10.	
11.	
12.	



Name _____



Write the words under the correct category.

shapes	colors	numbers

Name _____

Look at the cards and make the numbers. Write your number in the correct box.

1.	
2.	
3.	
4.	
5.	
6.	
7.	
8.	
9.	
10.	



11.	
12.	
13.	
14.	
15.	

Name _____


Put the number cards in order from least to the greatest and then write them in order.



Name _____

Write the math facts under each answer.

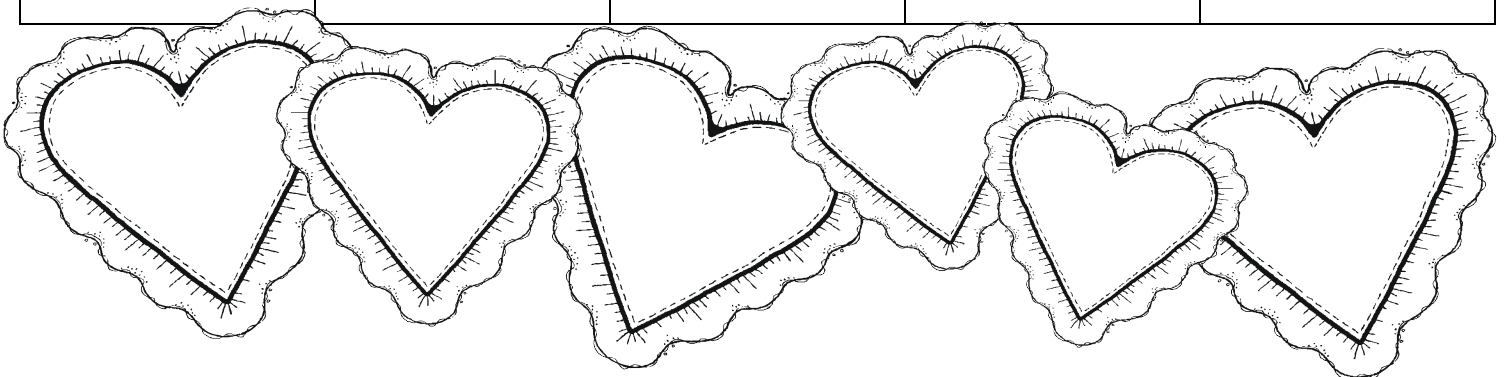
2	3	4	5



6	7	8

Name _____

Count by 2's using odd numbers.



Thank you for downloading my recording sheets for my Valentine unit.

The graphics are from scrappin doodle, kpm graphics, and pc crafter.

xoxo,
kacey